











## Answers

**Exercise 1:** Identify the major key of these key signatures:

a)	b)	c)	d)
			
<i>D major</i>	<i>B flat major</i>	C major	E major
e)	f)	g)	h)
			
<i>E flat major</i>	<i>G major</i>	<i>F major</i>	<i>A flat major</i>

**Exercise 2:** Identify the major key of these melodies:

a)	b)
	
<i>E flat major</i>	<i>A major</i>
c)	b)
	
<i>B flat major</i>	<i>E major</i>